

NAME:

SUBJECT: SCIENCE

GRADE: 3

DATE: 29.6.22

WORKSHEET -1

1. The Magic of Life

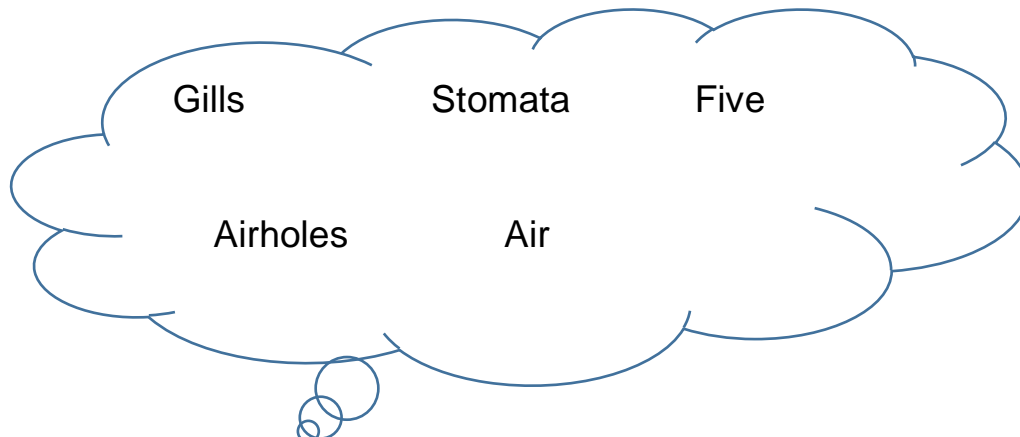
I. How do the following animals move?

1. Fish - _____
2. Elephant - _____
3. Kangaroo - _____
4. Birds - _____
5. Snail - _____

II. We feel changes around us with the help of sense organs such as






- a. Eyes - _____
- b. Nose - _____
- c. Ears - _____
- d. Skin - _____
- e. Tongue - _____

III. Choose the answers from the given cloud.







1. We have _____ sense organs.
2. Plants breathe through a small pores called _____.
3. A fish breathe with the help of _____.
4. Cockroach, Butterfly and mosquitoes breathe through _____ in their body.
5. All living things need to breathe _____.

IV. Observe the images and write yes or no in the boxes.

	Does it breath ?	Does it move?	Does it need food?	Does it reproduce?	Is it a living thing?
					
					
					
					
					
					
					

V. Match the sentences for the given life process

<p>Movement</p> 		<p>Something small becomes bigger.</p>
<p>Reproduction</p> 		<p>Get nutrients from food.</p>
<p>Nutrition</p> 		<p>Producing new plants or animals.</p>
<p>Grow</p> 		<p>Going from one place to another.</p>